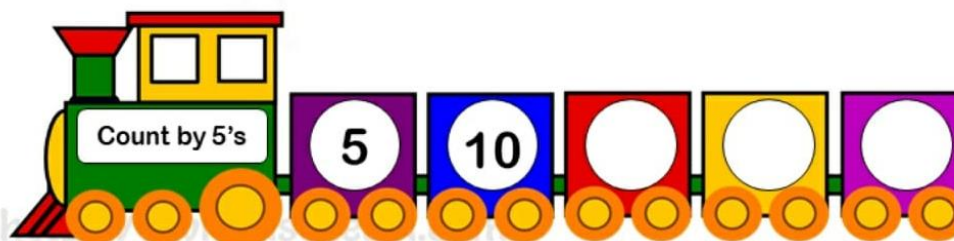

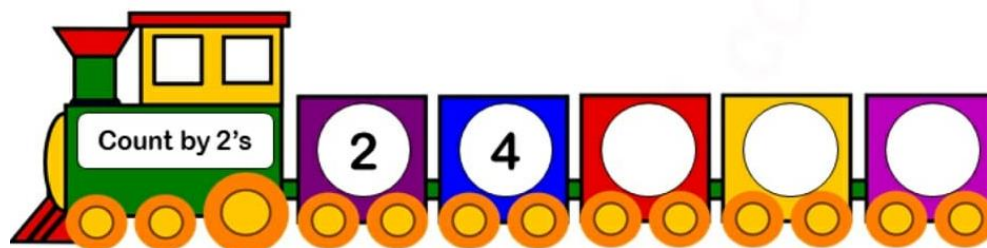


Assignment :-2 Subject: Maths Class:-I Teacher:-Mrs. Paramjeet Kaur

Name:-\_\_\_\_\_ Class & Sec.:-\_\_\_\_\_ Roll No.:-\_\_\_\_\_ Date:-

**Q1) Find the missing numbers.**



**Q.2) Count on by 2s to fill in the missing numbers.**

1)

0	2			8	
---	---	--	--	---	--

2)

10	12		16		
----	----	--	----	--	--

3)

20		24	26		
----	--	----	----	--	--

**Q.3) Count in 3s and fill the missing numbers.**

3		9		15
---	--	---	--	----

6		12		18
---	--	----	--	----

9		15		21
---	--	----	--	----

**Q.4) Count in 5s and fill the missing numbers.**

5)

25			40	
----	--	--	----	--

6)

	35			50
--	----	--	--	----

7)

10		20		
----	--	----	--	--

8)